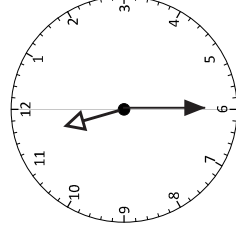
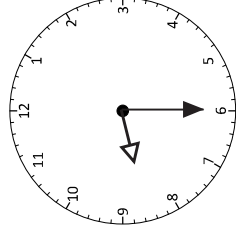
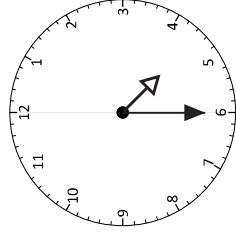
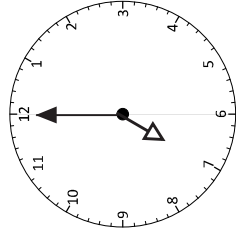
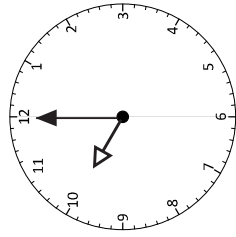
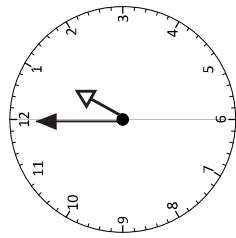


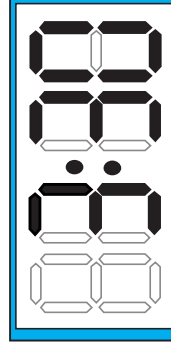
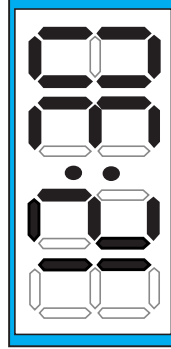
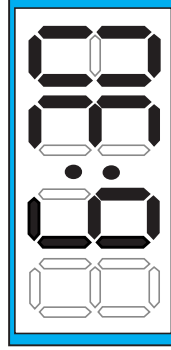
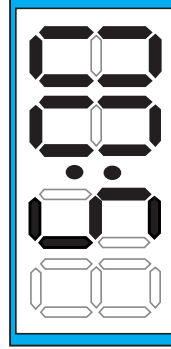
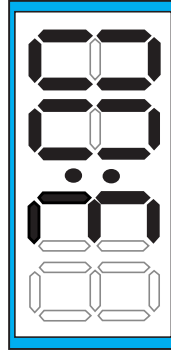
# Telling the time

## Sheet 1

1. Write the time in words under each clock.



\_\_\_\_\_

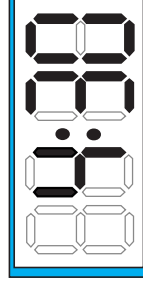
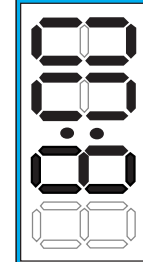
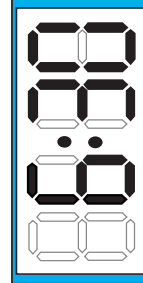
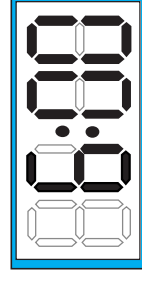
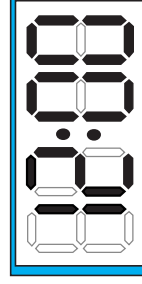
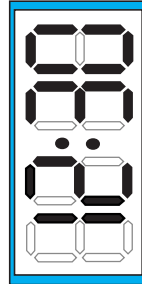
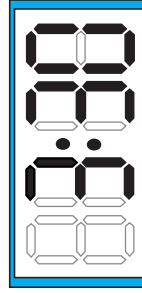
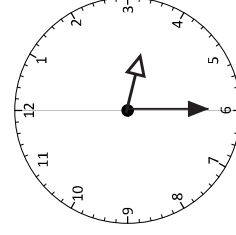
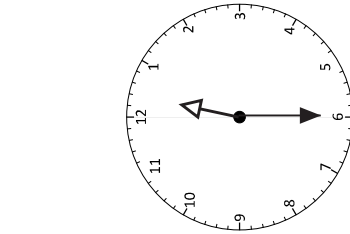
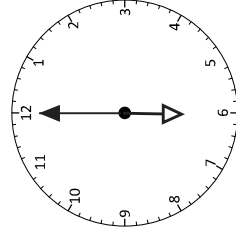
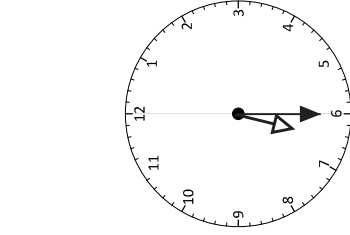
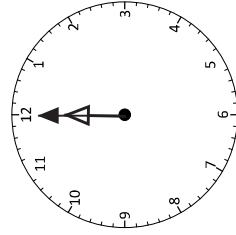
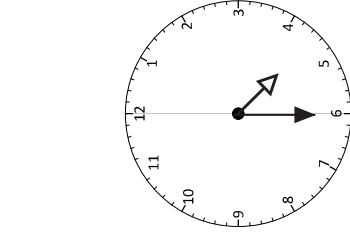
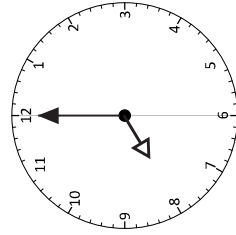


\_\_\_\_\_

# Telling the time

## Sheet 1 continued

2. Draw a line from the analogue clock to the matching digital clock.



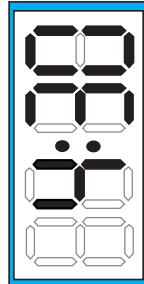
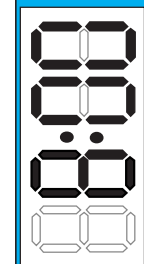
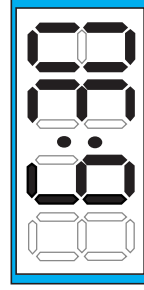
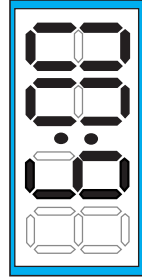
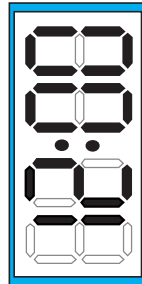
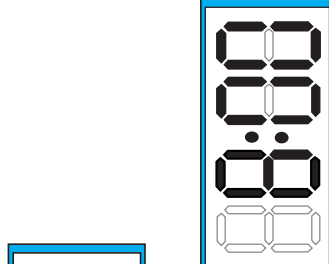
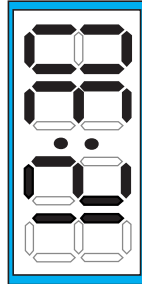
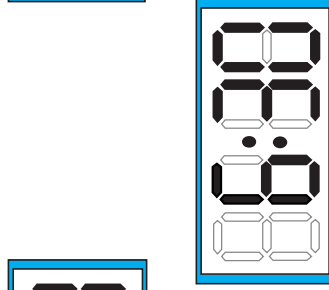
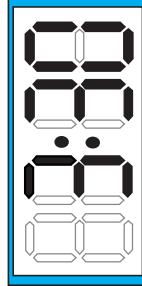
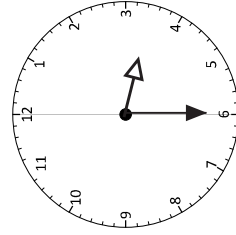
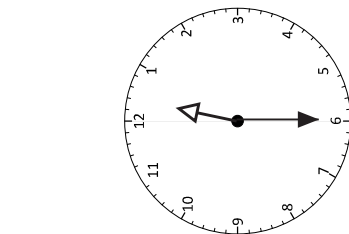
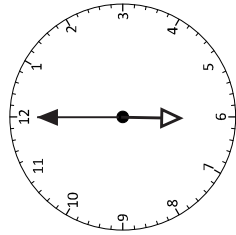
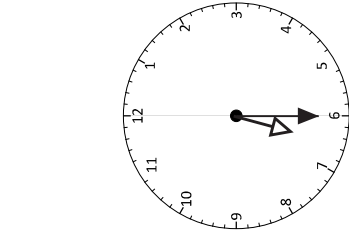
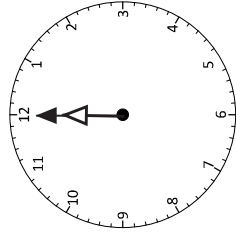
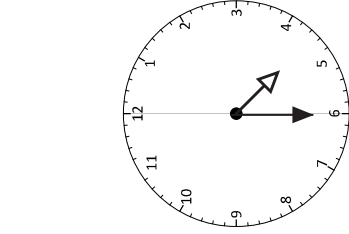
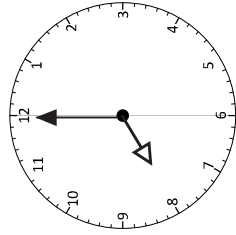
### Challenge

Use the digital times in question 2 and write them in order from earliest to latest time.

# Telling the time

## Sheet 2

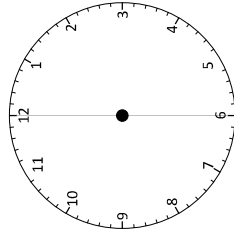
1. Draw a line from the analogue clock to the matching digital clock.



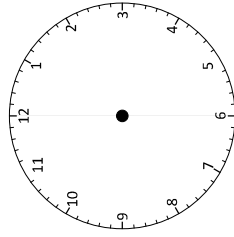
# Telling the time

## Sheet 2 continued

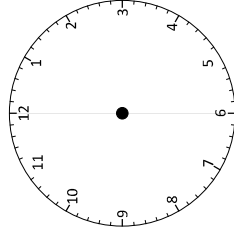
2. Draw the hands on these clocks to show the correct times.



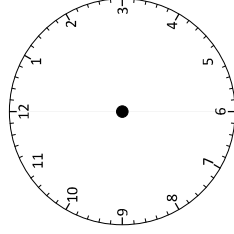
a) Half past 5



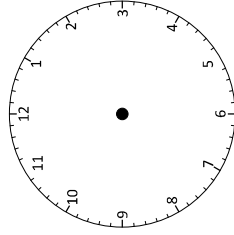
b) 7 o'clock



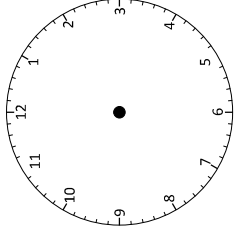
c) Half past 9



d) Half past 12

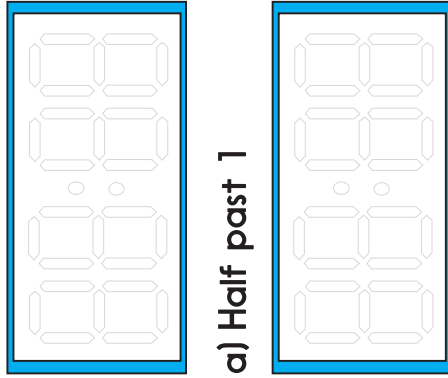


e) 2 o'clock

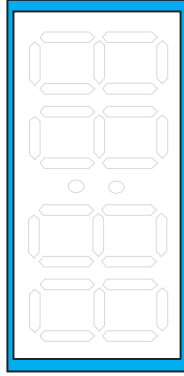


f) 11 o'clock

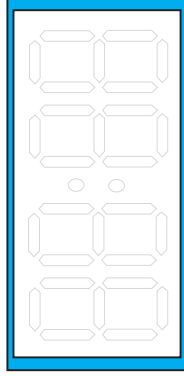
3. Write these times on digital clocks.



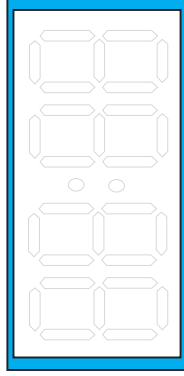
a) Half past 1



b) Half past 6



c) 8 o'clock



d) Half past 9

e) 3 o'clock

f) 1 o'clock

### Challenge

Choose three times in question 2. What might you be doing at that time on a weekend day?

# Measures

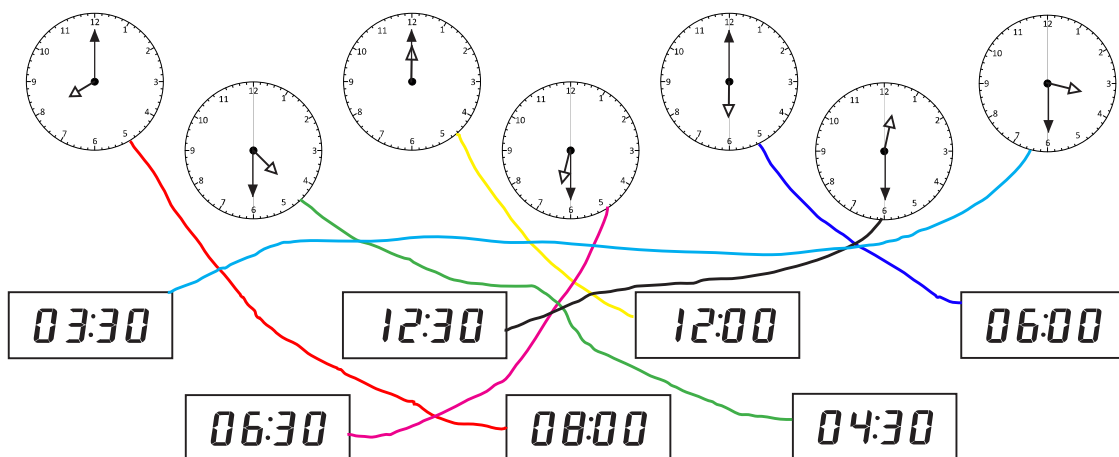
## Answers

### Day 1 Telling the time Sheet 1

- 1 o'clock  
10 o'clock  
7 o'clock  
Half past 4  
Half past 8  
Half past 11

- 3 o'clock  
5 o'clock  
Half past 6  
Half past 12  
Half past 3

2.

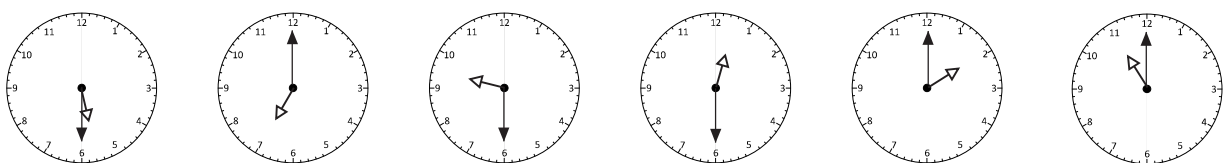


### Challenge

03:30, 04:30, 06:00, 06:30, 08:00, 12:00 and 12:30.

### Day 1 Telling the time Sheet 2

1. (Answers same as above question 2)
- 2.



## Measures Answers

3.

01:30

06:30

08:00

09:30

03:00

01:00

### Challenge

Answers should show three times with activities written against them.

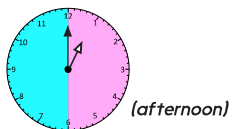
### Day 2 Ordering times Sheet 1

Earliest time	One o'clock
	Half past two
	Half past five
	Half past six
	Seven o'clock
	Half past seven
	Eight o'clock
	Half past nine
	Half past ten
Latest time	Quarter to eleven

### Day 2 Ordering times Sheet 2

05:30

Half past five



One o'clock

11:30

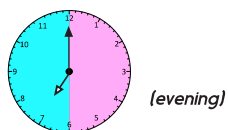
Half past eleven

09:45

Quarter to ten

03:30

Half past three



Seven o'clock