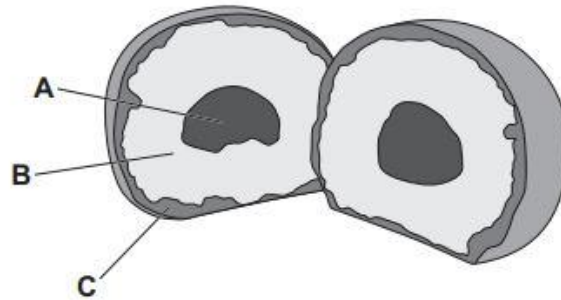


I. The model shows the different layers of the Earth.



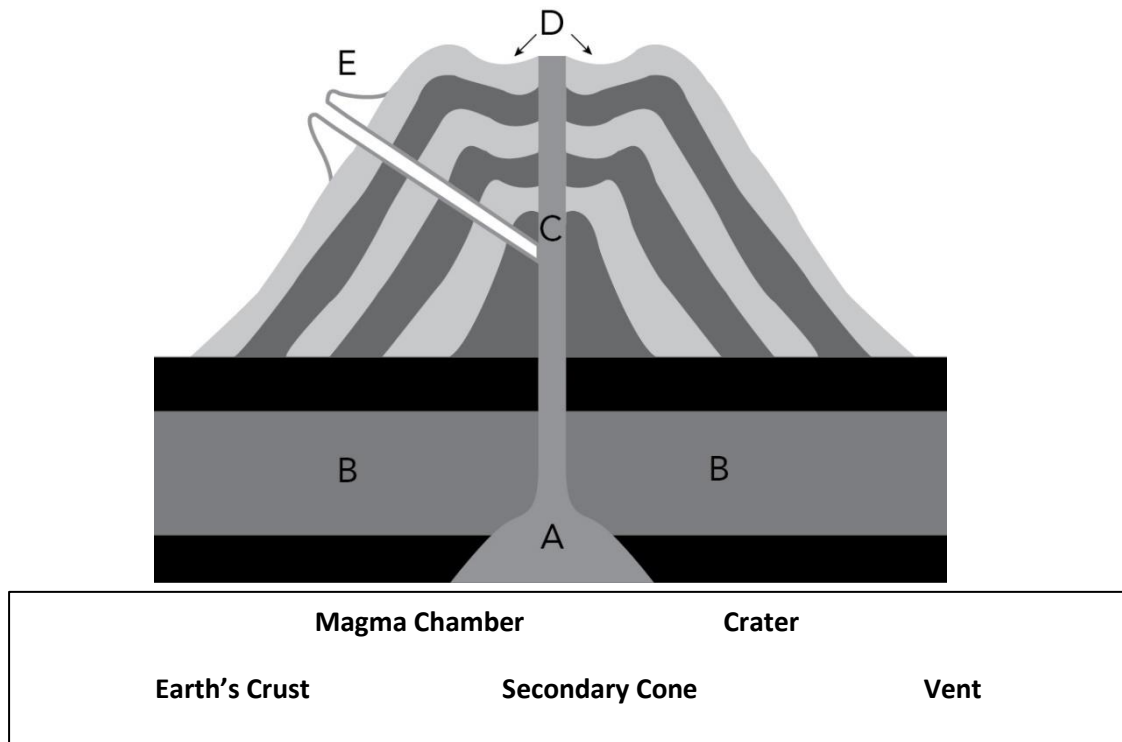
1. Draw a straight line from each letter to its correct layer.

Letter	layer
<input type="text" value="A"/>	<input type="text" value="core"/>
<input type="text" value="B"/>	<input type="text" value="crust"/>
<input type="text" value="C"/>	<input type="text" value="mantle"/>

2. This model can never be a true copy of real things. True or False? Why?

3. Layer A is made up of metals. Name the metals.

I. Name the parts of the volcano labelled A–E.




1. A _____
2. B _____
3. C _____
4. D _____
5. E _____

II. Write the differences:


6. An Earthquake and a Tsunami?

7. Focus and epicentre of an earthquake?

III. How the following animals adapted to their habitat.

8.  **Fish**

9.  **Polar Bear**

10.  **Toucan**



11. **Giraffe**



12. **Humming Bird**
