

Term: I
Session: 2024 - 2025



Name: _____

Date: _____ Score: ____ / ____

I. Match the body part with its function.

/4

1. Eyes	I can smell yummy chocolate cupcakes.
2. Nose	I see beautiful flowers around me.
3. Mouth	The school bell is ringing.
4. Ears	The strawberries are very sweet and fresh.

II. Circle the correct word.


/3

- We can hear with our (ears/hands).
- We can sort soft and hard toys with our (smell/touch).
- We can try sweet and salty snacks with our (taste/sight).

III. Write true or false.

/5

- We use our legs to walk. (True / False)
- Our nose helps us to see. (True / False)
- We have five fingers on each hand. (True / False)
- We can hear with our eyes. (True / False)
- Our hands are used to hold things. (True / False)







Term: I Session: 2024 - 2025		Name: _____ Date: _____ Score: ____ / ____
---------------------------------	---	---

IV. Alex is investigating touch.

/5

His predictions for what he touched and his results are in the table.




	A	B	C
Prediction	 orange	 book	 pencil
Result	 lemon	 book	 pen

Was he right?	Yes/no	Yes/no	Yes/no
---------------	--------	--------	--------

Draw a circle around the missing answers for column Band C.

How many predictions were right? _____

How many predictions were wrong? _____

Term: I Session: 2024 - 2025		Name: _____ Date: _____ Score: ____ / ____
---------------------------------	---	---

V. Think like a scientist and critically answer the below questions: /3

Smell touch smell sight hear

1. You are eating a fruit that is red and tastes sweet. Which of your senses are you using? Explain.

2. How can you use your senses to find out if an apple is different from a lemon?

3. You find two objects: one is soft and the other is hard. How would you figure out which is which without looking?
