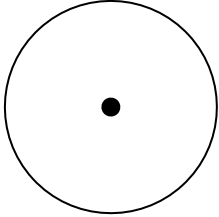
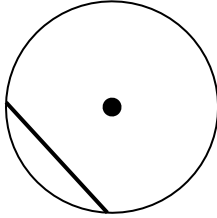
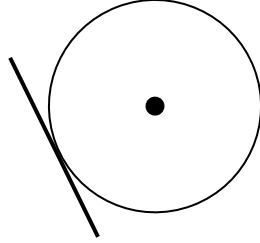
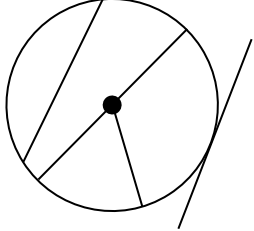
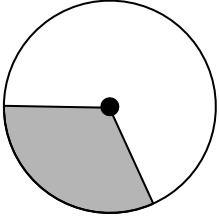
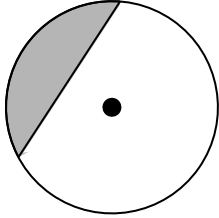
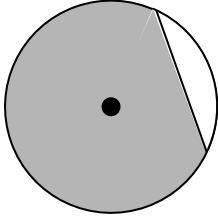

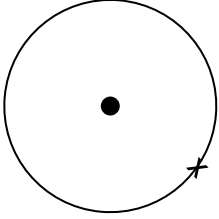
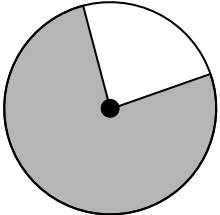






## THE CIRCLE

### PARTS OF A CIRCLE

Ref: G514. **1S1**

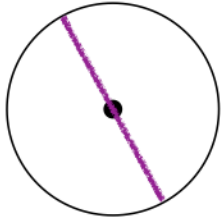
<p><b>A1</b> Draw a diameter:</p> 	<p><b>A2</b> What line joins two points on the circumference?</p> 	<p><b>A3</b> What line touches a circle at only one point?</p> 	<p><b>A4</b> Use colour to show the circumference:</p> 
<p><b>B1</b> Give the name of the shaded region:</p> 	<p><b>B2</b> Give the name of the shaded region:</p> 	<p><b>B3</b> Give the name of the shaded region:</p> 	<p><b>B4</b> Draw a radius:</p> 
<p><b>C1</b> Draw the tangent at point T:</p> 	<p><b>C2</b> Give the name of the shaded region:</p> 	<p><b>C3</b> Draw and shade a minor segment:</p> 	<p><b>C4</b> Draw and shade a major sector:</p> 




## THE CIRCLE PARTS OF A CIRCLE

Ref: G514. **1S1**

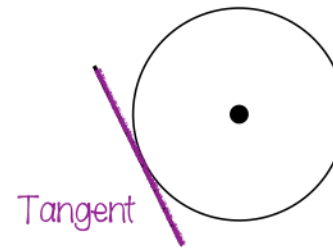
**A1** Draw a diameter:



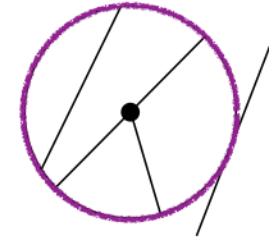
**A2** What line joins two points on the circumference?



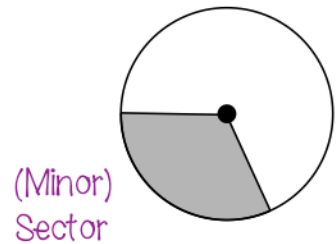
**A3** What line touches a circle at only one point?




**A4** Use colour to show the circumference:



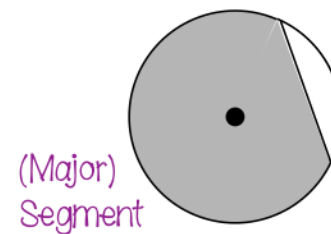
**B1** Give the name of the shaded region:



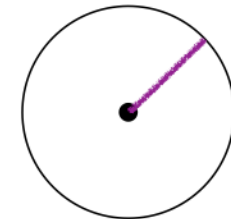
**B2** Give the name of the shaded region:



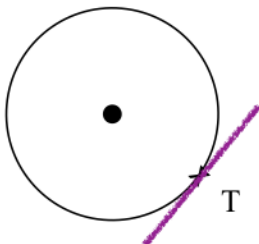
**B3** Give the name of the shaded region:



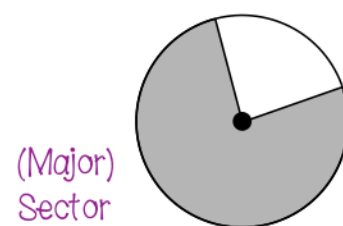
**B4** Draw a radius:



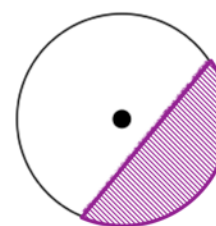
**C1** Draw the tangent at point T:



**C2** Give the name of the shaded region:



**C3** Draw and shade a minor segment:



**C4** Draw and shade a major sector:

