

I. Write T for true and F for false statement. /6

1. Microhabitats are always found in forests. F
2. A log on the ground can be a microhabitat for insects. T
3. In a food chain, plants get their energy from the sun. T
4. Humans are always at the end of every food chain. F
5. Farms are where we get food like milk, eggs, and wheat. T
6. Chickens on a farm provide us with wool. F

II. Choose the most appropriate option. /6

1. Where might you find a microhabitat in your garden?
 - On top of the grass
 - Under a log or pile of leaves
 - In the middle of the road
2. What do farmers grow on farms?
 - Cars and trucks
 - Fruits and vegetables
 - Toys and books
3. Which of these animals might live in a microhabitat?
 - A lion
 - A bird
 - An ant
4. In a food chain, what do herbivores eat?
 - Other animals
 - Plants
 - Rocks









5. What do farmers need to help their crops grow?

- Rain and sunlight
- Snow and ice
- Rocks and sand

6. Where does the energy in a food chain usually start?

- The sun
- The ocean
- A rabbit

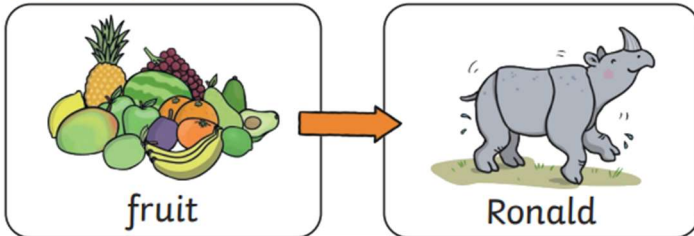
III. Use the given pictures to complete the food chain.




Write the words correctly in the given boxes to complete the food chain. /6

ANSWER

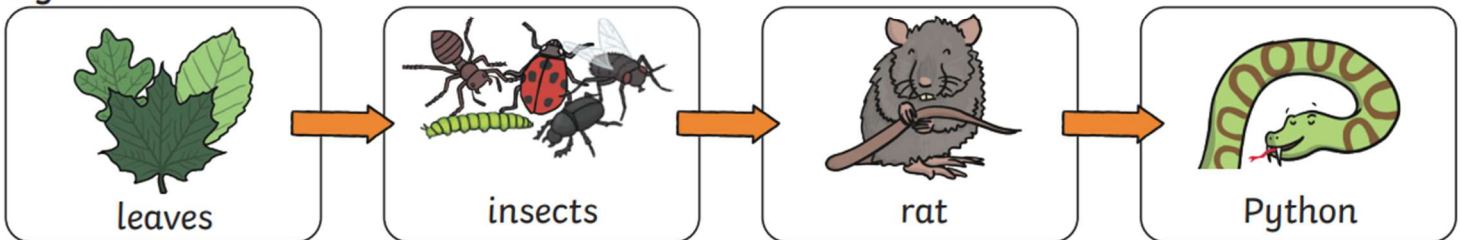
Ronald the Rhino



Leopard



Python



IV. What am I?

Read the clues and guess the farm animal's name. /2

1. I eat grass and people like to drink my milk. **COW**
2. I live in a coop. My young are hatched. I lay eggs. **HEN**

Teacher's Signature: _____

Parent's Signature: _____

Max Marks: 20
Term I



Name: _____
Date: _____
