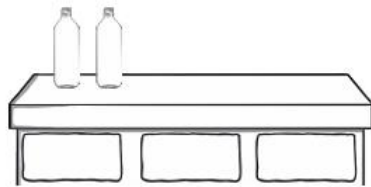


Number Bonds to 10

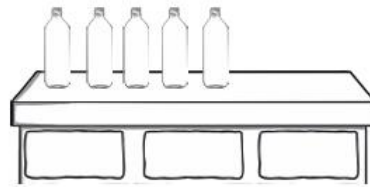
Learning Objective:

- know number bonds to 10 and write addition sentences.

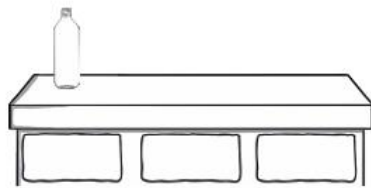
Some bottles have fallen off of the wall. There should be 10 altogether. Draw the bottles that have fallen off the wall and complete the number sentences.



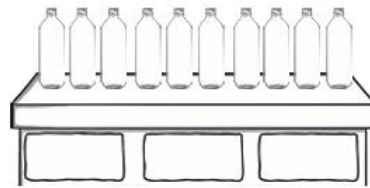
$$2 + \square = 10$$



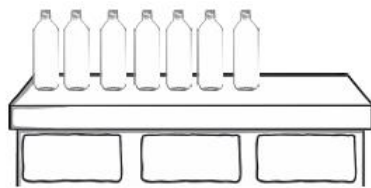
$$5 + \square = 10$$



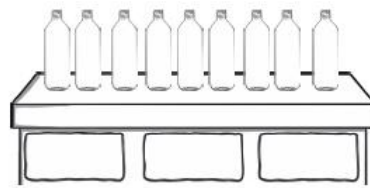
$$1 + \square = 10$$



$$10 + \square = 10$$



$$7 + \square = 10$$



$$9 + \square = 10$$

Self-reflection

- I can write the number bonds to 10 and write addition sentences.



I want my teacher to help me in: _____