

I. Circle the correct answer.

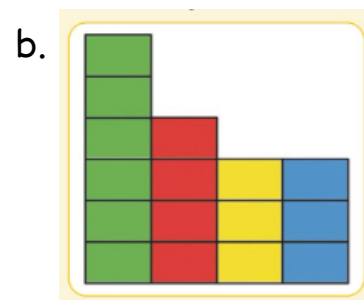
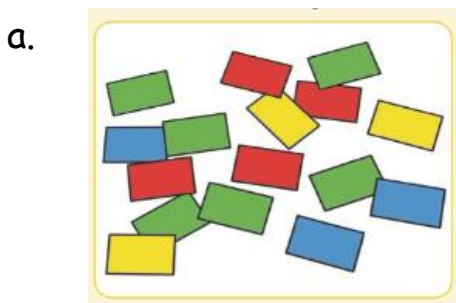
i) Aisha wants to play games. Which device she can use?



ii) Fatima wants to count how many steps she walks every day and see how much exercise she does. Which device should she use?



iii) Ali has a box full of colored blocks. He sorts them according to their colors. Can you identify which picture shows sorting?



iv) Alex is making a program on ScratchJr, and he wants his character to move **faster**. Can you help him select the fast speed block from these pictures?



v) Which block is used to start the program?






II. Order the following data.

Letters	From a to e	From e to a
a		
e		
b		
c		
d		

III. Fill in the table with each person's data.



Job	Man or woman	Hat or no hat
Carpenter 		
Dentist 		
Doctor 		

a. How many people wear hats? Shade the boxes with the word hat in blue.

b. How many people are women? Shade the boxes with the word woman in red.

IV. Follow the code to put the steps in the right order.



Algorithm

Step	Instruction
	Start on Green Flag
	Move at slow speed
	Move 11 steps to the right
	Stop program