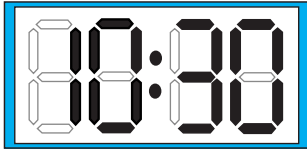


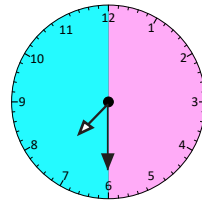
Ordering times

Sheet 1

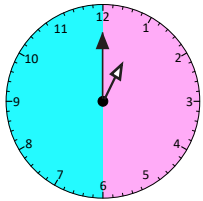
1. Look at the times below. Start at 1 o'clock. They are all times in the morning.
Write the rest of the times in order from the earliest to the latest as you go through the day.



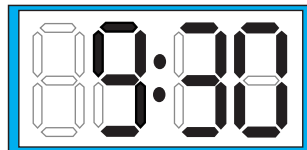
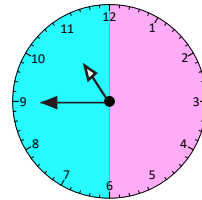
Eight o'clock



Half past two



Half past five



Seven o'clock

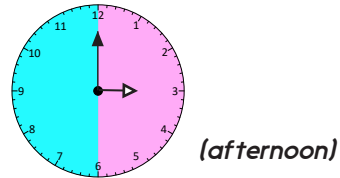
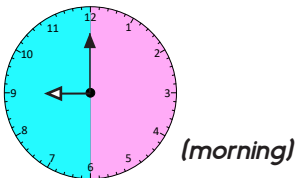
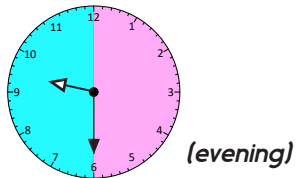
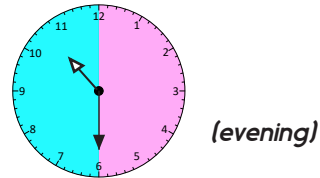
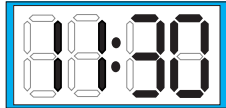
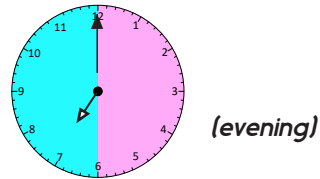
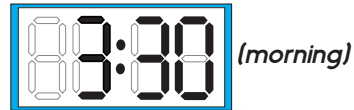
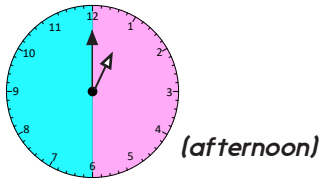
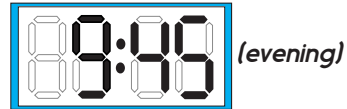
Half past 6

Earliest time	
Latest time	

Ordering times

Sheet 2

1. Write the times in words under each clock.
2. Write the times in order from the earliest to the latest in the table.



Earliest time	<i>Half past three (morning)</i>
Latest time	

Challenge

Write the missing digits on the digital displays.

Half past 4:

Half past 6:

Half past Midnight is