

Year 2 Autumn Maths Block Assessments: Shape and Data (A)

1 In this grid:

B	I	G
A	N	D
H	O	P

What letter is **above** D?

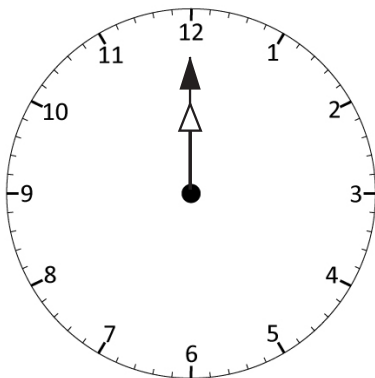
What letter is **below** A?

What letter is to the **right** of O?

What letter is to the **left** of I?

4 marks

2 Imagine facing 12.
Where will you be **facing after**:



Half a turn right.

A quarter turn left.


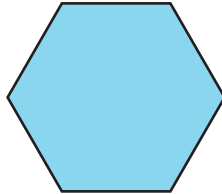
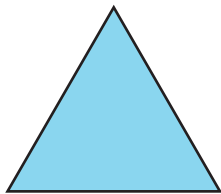
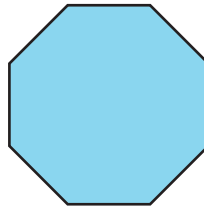
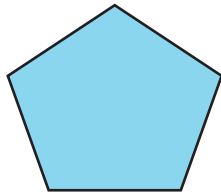
A quarter turn clockwise.

A half turn anti-clockwise.

4 marks

3 Write the correct name by each shape.

triangle rectangle pentagon hexagon octagon square

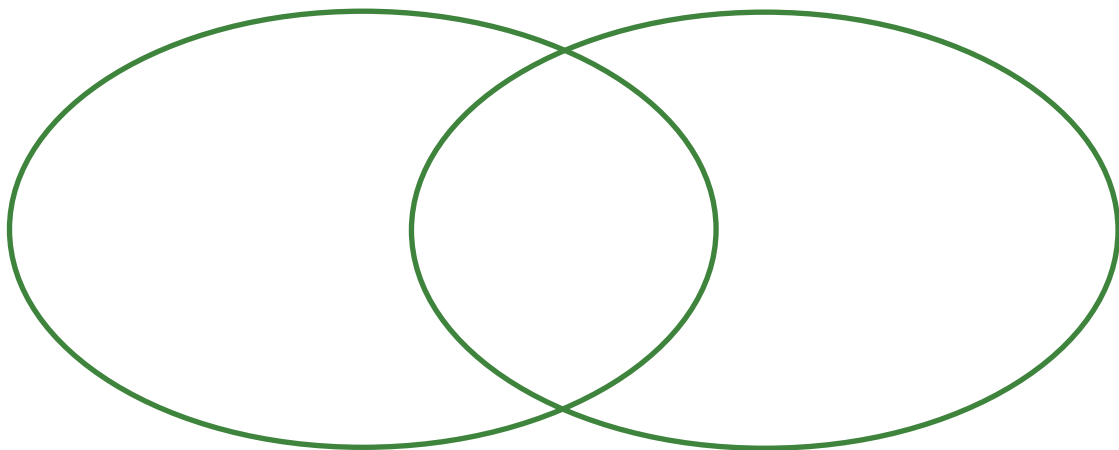


6 marks

4 Place these capital letters in the Venn diagram: **A C D O P S**

Symmetrical

All curved lines



Which letter doesn't fit in either set?

6 marks

Total /20 =