



Counting in 10s

Sheet 1a


Draw the number of 10p coins needed to pay for these items.



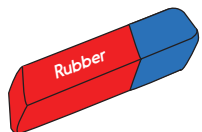
Scissors = 40p




Pen = 30p



Pencil = 20p



Rubber = 50p



Ruler = 70p



Glue = 90p

Counting in 2s

Sheet 1b

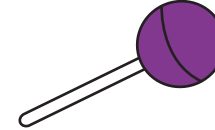
Draw the number of 2p coins needed to pay for these items.



Apple = 8p



Sweet = 12p




Lollipop = 24p



Bubble gum = 18p



Chocolate frog = 14p



Banana = 22p

Counting in 10s and 2s

Sheet 2

Write the number of 10p coins needed to pay for these items.

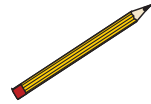


Scissors = 40p

4 lots of 10p
4 x 10p = 40p



Pen = 30p



Pencil = 20p



Rubber = 50p



Ruler = 70p



Glue stick = 90p

Write the number of 2p coins needed to pay for these items.

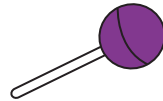


Apple = 8p

4 lots of 2p
4 x 2p = 8p




Sweet = 12p



Lollipop = 24p



Bubble gum = 18p



Chocolate frog = 14p



Banana = 22p

Challenge

Write the missing numbers in these diagrams.

?						
2p	2p	2p	2p	2p	2p	2p

40p			
?	?	?	?