


Weight Sheet 1

An apple weighs about 100 grams.
A bag of sugar weighs 1 kilogram.




Draw the things you think will weigh less than 100 grams	Draw the things that might weigh about 1 kilogram	Draw the things you think will weigh more than 1kg


Weight

Sheet 2


How many 100g weights balance each item?
Write the number of weights. Count in steps of 100 to find the weight in grams.
The first one is done for you.



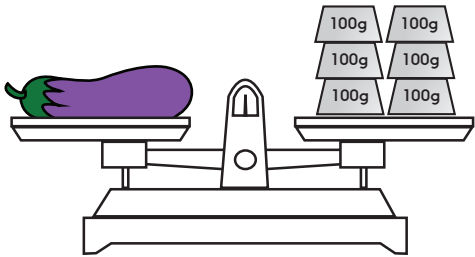
2 weights 200 grams




_____ weights _____ grams



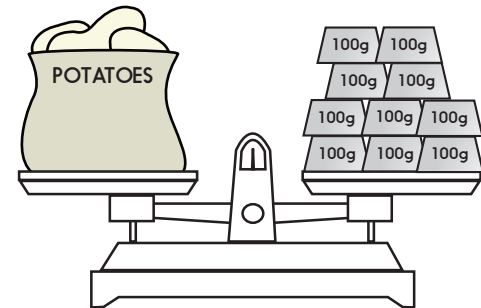
_____ weights _____ grams



_____ weights _____ grams



_____ weights _____ grams



_____ weights _____ grams

Weight

Sheet 2 continued

Draw each item weighed in the correct place in the table below.

Lighter than 500 grams	Heavier than 500 grams

Challenge

Write some items that make the same weight, e.g. 8 apples = 1 cabbage.