










Dividing by 3, 4, 5 and 10

Sheet 1

Draw round groups of stars to help work these out.

- $11 \div 3 =$ 
- $16 \div 5 =$ 
- $13 \div 5 =$ 
- $12 \div 5 =$ 
- $11 \div 4 =$ 
- $16 \div 4 =$ 
- $14 \div 3 =$ 
- $14 \div 4 =$ 
- $14 \div 5 =$ 
- $21 \div 10 =$ 