













Day 3: Begin to find all possibilities by making an ordered list.

  $5p + 2p = 7p$

   $5p + 1p + 1p = 7p$

    $2p + 2p + 2p + 1p = 7p$

     $2p + 2p + 1p + 1p + 1p = 7p$

      $2p + 1p + 1p + 1p + 1p + 1p = 7p$

       $1p + 1p + 1p + 1p + 1p + 1p + 1p = 7p$

