
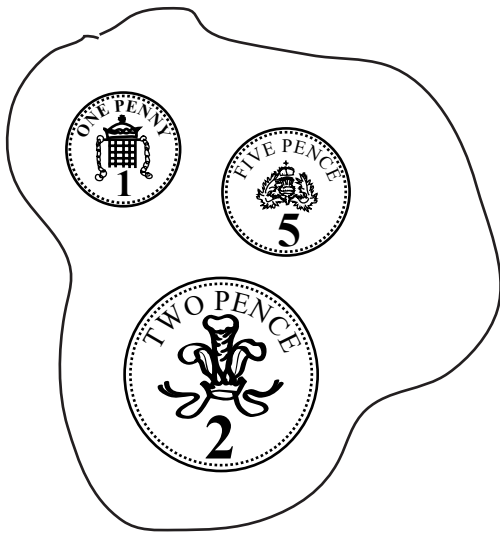


# Coins

## Sheet 1

Choose one coin from each set. Add these together.  
Write a matching addition, e.g. 1p + 1p = 2p.  
Repeat at least 4 times.



### Challenge

$$\square + \square + \square = 5p$$

$$\square + \square + \square + \square = 10p$$

Write the coins in the empty boxes.

# Coins



## Sheet 2

Choose one coin from each set.

Add these together.

Write a matching addition, e.g. 1p + 1p = 2p.

Repeat at least 6 times.



### Challenge

$$\square + \square + \square = 5p$$

$$\square + \square + \square + \square = 10p$$

Write the coins in the empty boxes.