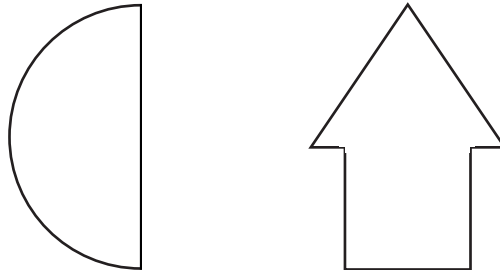


Year 1 Autumn Maths Block Assessments: Shape and Data

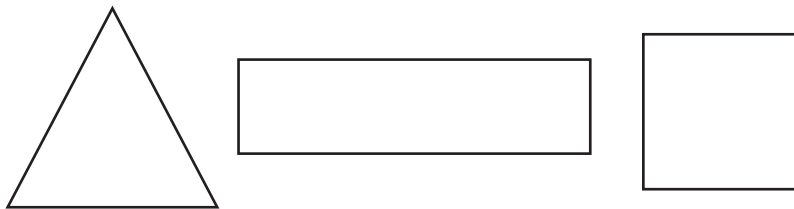
- 1** Draw a line of symmetry on these shapes.
You can use a mirror to help.



2 marks

- 2** square triangle rectangle

Write the correct name by each shape.



3 marks


- 3** Put the capital letters of the word TEACHER into this table:

Letters with all straight lines	Letters with curves

2 marks

- 4** cylinder sphere cuboid

Write the correct name of the shape by each object.



3 marks

Total / 10 =