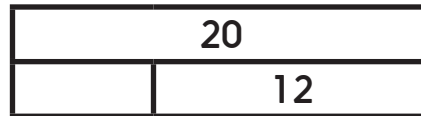
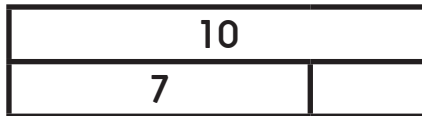


## Year 2 Autumn Maths Block Assessments: Addition and Subtraction

1 Write the missing number in each bar model.



2 marks

2 Find the missing numbers.

$1 + \square = 10$

$\square + 4 = 10$

$7 + \square = 20$

$5 + 6 + \square = 20$

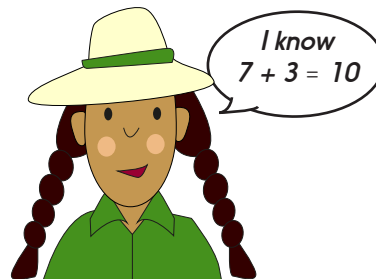
4 marks

3 Use the number fact to find the missing numbers.

$27 + \square = 30$

$37 + 3 = \square$

$\square + 3 = 50$



3 marks

4 Use the number facts to find the missing numbers.

$45 + \square = 50$

$62 + 8 = \square$

$\square + 4 = 90$

3 marks

## Year 2 Autumn Maths Block Assessments: Addition and Subtraction

**5** Write the new prices in the blank labels.

23p      77p      45p

**Sale!**  
All prices reduced by 10p

Blank price tags for calculation.

3 marks

**6** Find the missing numbers.

$74 + 10 = \square$

$46 + 20 = \square$

$17 + 21 = \square$

$55 - 20 = \square$

$63 - 21 = \square$

5 marks

Total /20 =

## Year 2 Autumn Maths Block Assessments: Addition and Subtraction

6

1	2	3	4	5	6	7	8	9	10
11	12	13	14	15	16	17	18	19	20
21	22	23	24	25	26	27	28	29	30
31	32	33	34	35	36	37	38	39	40
41	42	43	44	45	46	47	48	49	50
51	52	53	54	55	56	57	58	59	60
61	62	63	64	65	66	67	68	69	70
71	72	73	74	75	76	77	78	79	80
81	82	83	84	85	86	87	88	89	90
91	92	93	94	95	96	97	98	99	100

