

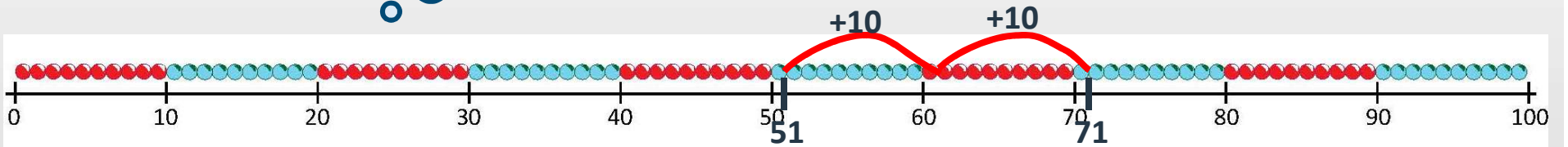
Day 3: Add 10, 11, 20 and 21.

Show me 51.

We're going to add 20. How can we do it?



$$51 + 20 = 71$$

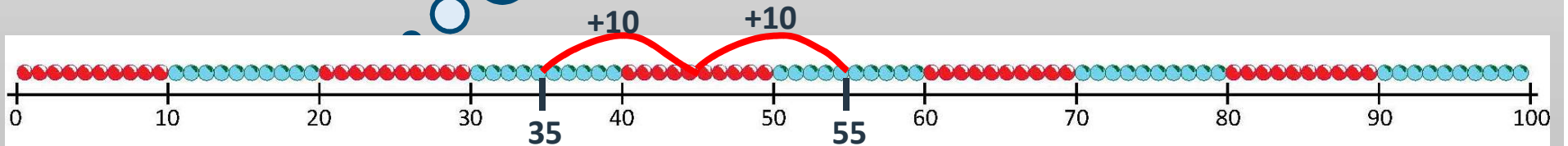


Show me 35.

We're going to add 20. How can we do it?




$$35 + 20 = 55$$



Day 3: Add 10, 11, 20 and 21.

1-100 number grid

1	2	3	4	5	6	7	8	9	10
11	12	13	14	15	16	17	18	19	20
21	22	23	24	25	26	27	28	29	30
31	32	33	34	35	36	37	38	39	40
41	42	43	44	 45	46	47	48	49	50
51	52	53	54	55	56	57	58	59	60
61	62	63	64	65	66	67	68	69	70
71	72	73	74	75	76	77	78	79	80
81	82	83	84	85	86	87	88	89	90
91	92	93	94	95	96	97	98	99	100

Show me **45** on
your bead strings.

Now show me
the number
10 more.

Oh no! I meant to
add 11!

What shall we do?

Now show me **1**
more.