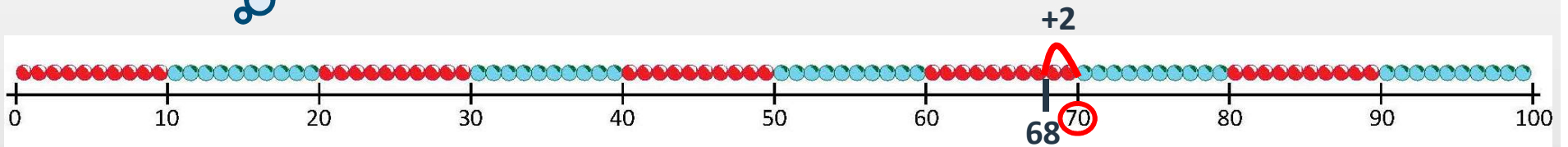


Day 3: Use pairs to 10 to find how many to the next 10.

How many beads do we add to 68 to make 70?



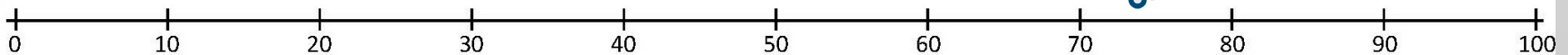
$$68 + 2 = 70$$



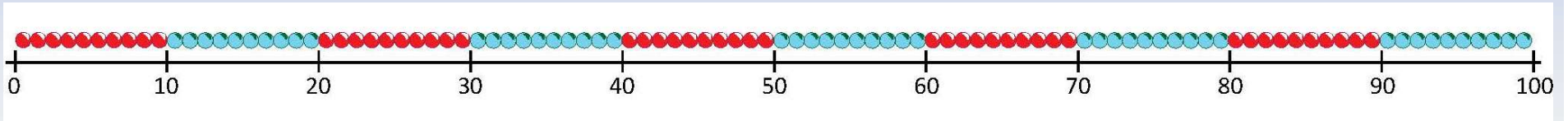
Mark 57 on this landmarked line.

This time we can't see the beads, so we have to work out what to add.

What number sentence can we write?

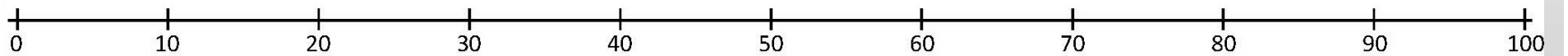


Day 3: Use pairs to 10 to find how many to the next 10.



Mark 75 on this
landmarked line.

How many to
the next 10s
number?



What number
sentence can we
write?

