
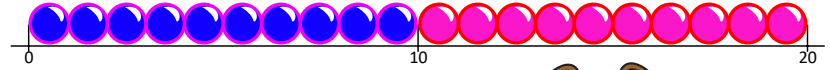


# At the toy shop

## Sheet 1

You have 20p to spend at the toy shop.


Fill each bag with different items that will add up to 20p or less.



5p



6p




9p



3p



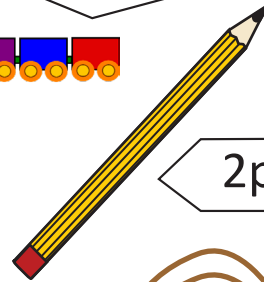
10p



2p



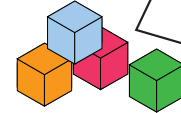
10p




2p



7p



15p




### Challenge

Work out how much change you will get from 20p for each bag. Write your answers below.

# At the toy shop

## Sheet 2

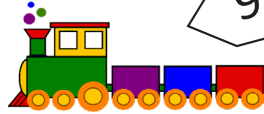
You have 20p to spend at the toy shop. Fill each bag with different items that will add up to 20p or less.



5p



6p




9p



3p



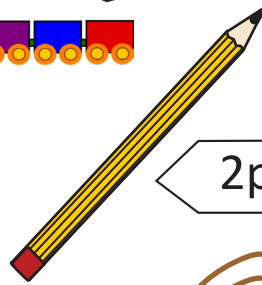
15p



12p



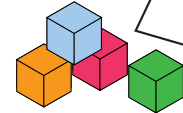
10p









2p



7p



11p



### Challenge

Work out how much change you will get from 20p for each bag. Write your answers below.

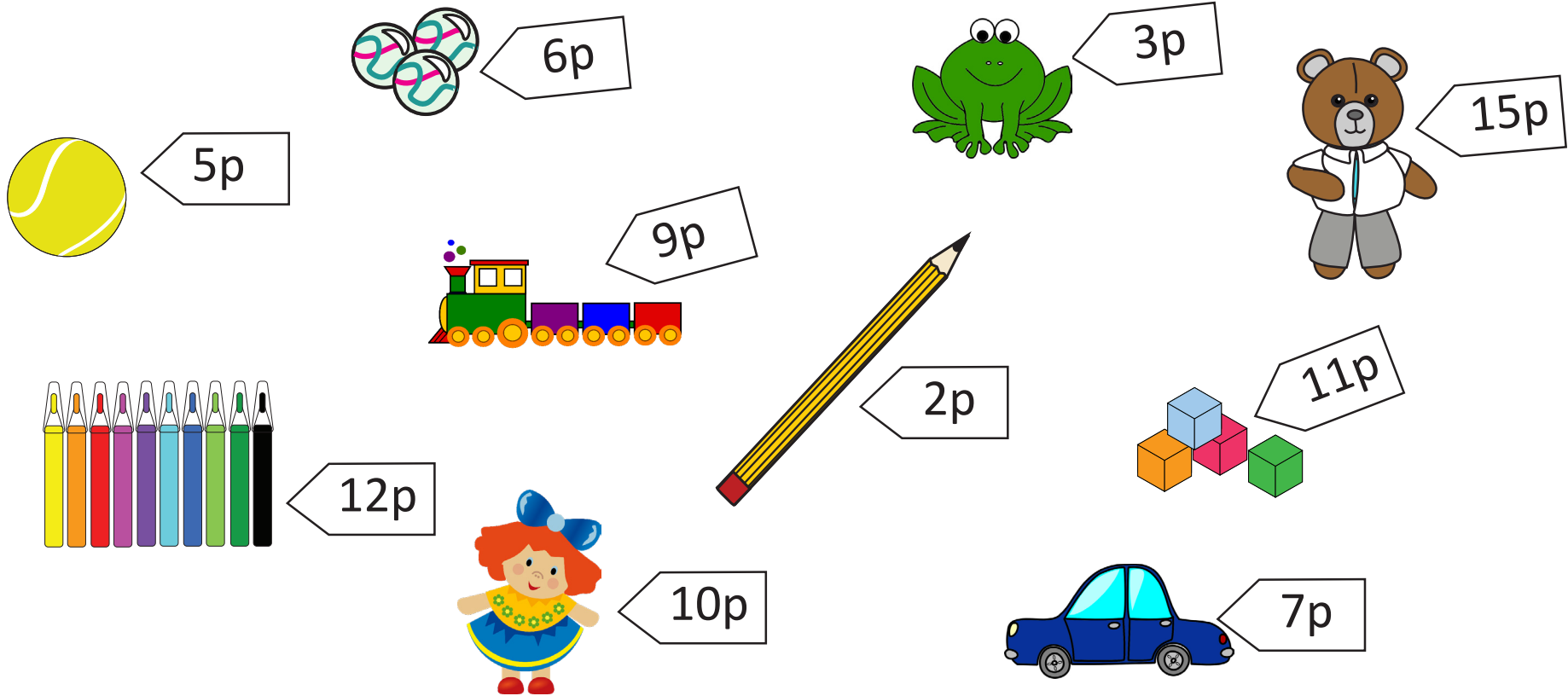
# At the toy shop

## Sheet 3

You are a shop keeper in the toy shop.

Pick 3 items and write them onto the receipts.

Calculate the total amount that needs to be paid and find the change from 40p.



# At the toy shop

## Sheet 3

**RECEIPT**

Items	Cost
_____	_____
_____	_____
_____	_____
_____	_____
<b>TOTAL</b>	
_____	
Change	

**RECEIPT**

Items	Cost
_____	_____
_____	_____
_____	_____
_____	_____
_____	_____
<b>TOTAL</b>	
_____	
Change	

**RECEIPT**

Items	Cost
_____	_____
_____	_____
_____	_____
_____	_____
_____	_____
<b>TOTAL</b>	
_____	
Change	

**RECEIPT**

Items	Cost
_____	_____
_____	_____
_____	_____
_____	_____
_____	_____
<b>TOTAL</b>	
_____	
Change	

**RECEIPT**

Items	Cost
_____	_____
_____	_____
_____	_____
_____	_____
_____	_____
<b>TOTAL</b>	
_____	
Change	

**RECEIPT**

Items	Cost
_____	_____
_____	_____
_____	_____
_____	_____
_____	_____
<b>TOTAL</b>	
_____	
Change	