







Year 1 Autumn Maths Block Assessments: Addition and Subtraction (A)


1 Count on from the first number. Write the total.


  

2 marks

2 Count on to find the total number of beads.
Write the addition.


 + =


 + =

2 marks

3 Find the missing number.


$$7 + \square = 10$$

$$\square + 3 = 7$$

$$2 + \square = 5$$

3 marks

4 2 more people get on.
How many are on the bus now?



Complete the number sentence:

$$3 + 2 = \square$$

1 mark

Year 1 Autumn Maths Block Assessments: Addition and Subtraction (A)

- 5 5 people get off when the bus stops.
How many are now on the bus?



Complete the number sentence:

$$6 - \square = \square$$

1 mark

- 6 4 people get off when the bus stops.
How many are now on the bus?



Complete the number sentence:

$$\square - \square = \square$$

1 mark

Total /10 =