



# Frog subtraction

## Sheet 1


Some frogs jump into the pond.  
How many will be left?




$$5 - 1 = 4$$




$$7 - \square = \square$$




$$6 - \square = \square$$




$$8 - \square = \square$$




$$10 - \square = \square$$




$$5 - \square = \square$$



$$9 - \square = \square$$



$$8 - \square = \square$$




$$10 - \square = \square$$

# On the buses

## Sheet 2

3 people get off each bus.  
How many are left on?  
Write the subtraction.



$$7 - 3 = 4$$

