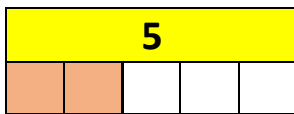
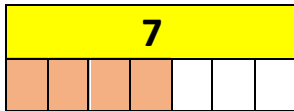
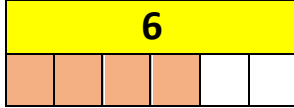


Addition and Subtraction Unit 2

Problem solving and reasoning questions

Write the number of white bricks in these diagrams.



Now write the matching additions.

The crocodile has 6 fish.

He eats 4.

How many are left?

The mouse has 5 bits of cheese. She finds 2 more. How many has she now?

Write all the different ways of making 7.

E.g. 1 and 6

Make sure you have them all!

Fill in the missing numbers.

$$5 + \underline{\quad} = 10$$

$$7 + \underline{\quad} = 10$$

$$2 + \underline{\quad} = 10$$

These questions should be provided for children to do once the unit has been completed. They assess the children's mastery of the skills and concepts in this unit.