



Pairs to make 7

Sheet 1


Write the matching additions.




$$\boxed{6} + \boxed{1} = 7$$




$$\boxed{} + \boxed{} = 7$$




$$\boxed{} + \boxed{} = 7$$




$$\boxed{} + \boxed{} = 7$$



$$\boxed{} + \boxed{} = 7$$



$$\boxed{} + \boxed{} = 7$$



$$\boxed{} + \boxed{} = 7$$

Challenge

Write a matching subtraction for each set.

Pairs to make 7

Sheet 2

Draw spots on the second sock so there are 7 spots on the pair.
Complete the matching addition.



$$\boxed{1} + \boxed{} = 7$$



$$\boxed{2} + \boxed{} = 7$$



$$\boxed{5} + \boxed{} = 7$$



$$\boxed{3} + \boxed{} = 7$$



$$\boxed{6} + \boxed{} = 7$$



$$\boxed{4} + \boxed{} = 7$$



$$\boxed{7} + \boxed{} = 7$$