



Caterpillar addition



Sheet 1

Count on to find how many caterpillars will be on each leaf.



1.



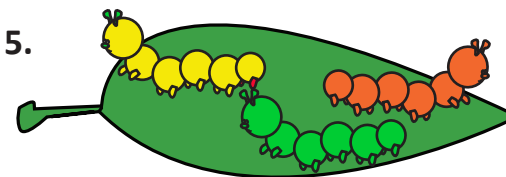
4.





2.



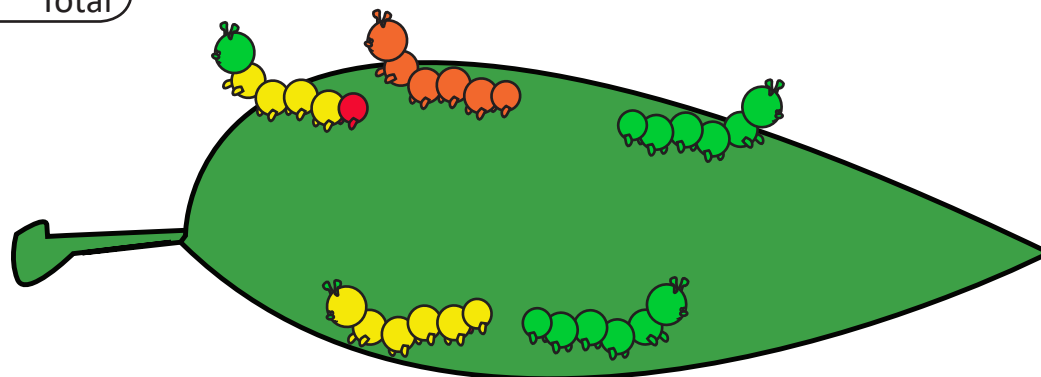
5.



3.



Add your own caterpillars to the leaf.
How many are there altogether?



Bus stop addition

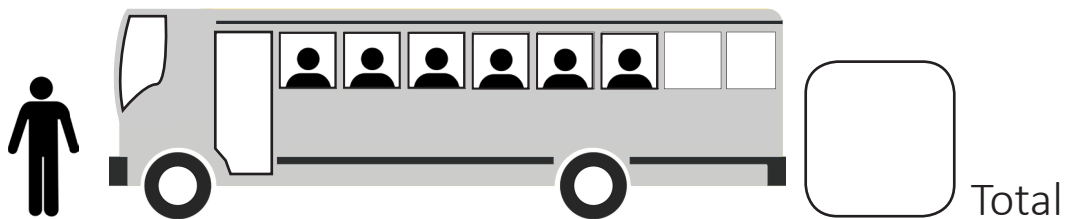
Sheet 2

Each bus picks up people.
At each stop, how many are on the bus?




A yellow bus with 3 people inside. To the left, 3 people (2 men and 1 woman) are standing. To the right is a rounded square box for the total.

Total




A grey bus with 6 people inside. To the left, 1 person is standing. To the right is a rounded square box for the total.

Total



A blue bus with 5 people inside. To the left, 3 people (2 men and 1 woman) are standing. To the right is a rounded square box for the total.

Total



A purple bus with 8 people inside. To the left, 2 people (1 man and 1 woman) are standing. To the right is a rounded square box for the total.

Total



A green bus with 7 people inside. To the left, 1 person is standing. To the right is a rounded square box for the total.

Total

Challenge

One more person gets on each bus. Write the number on each bus now.