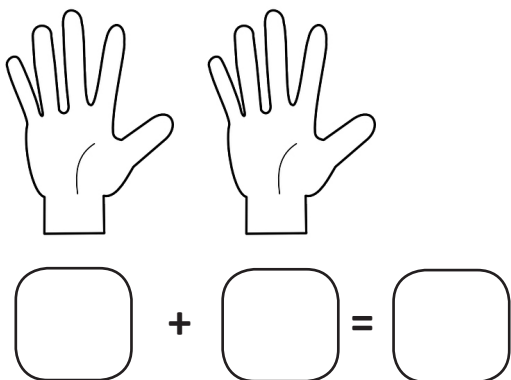
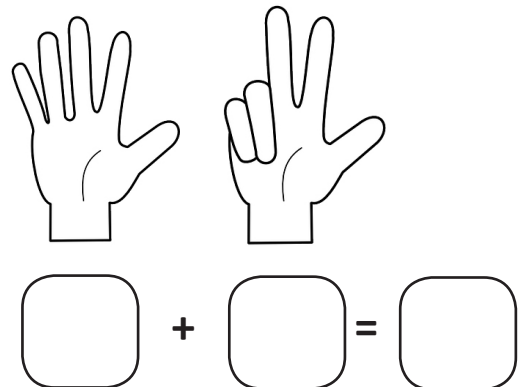
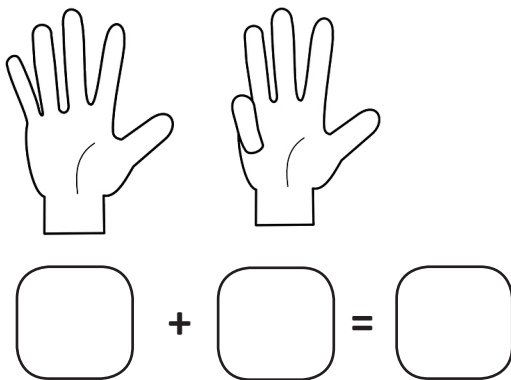
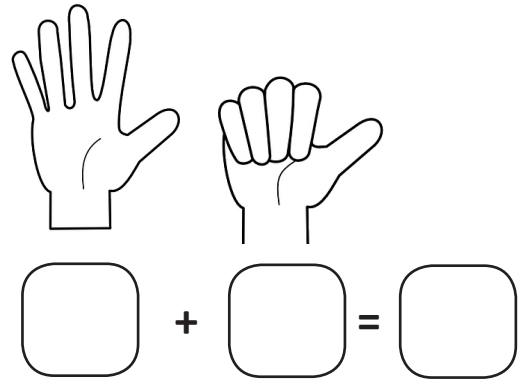
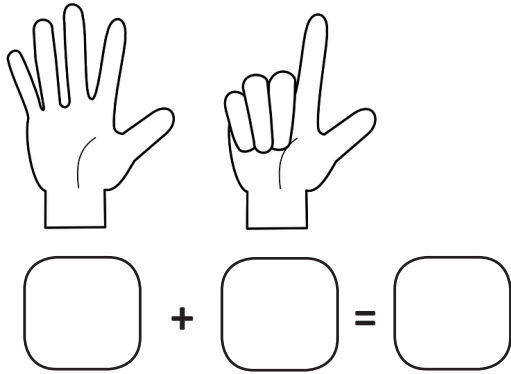


Finger addition

Sheet 1

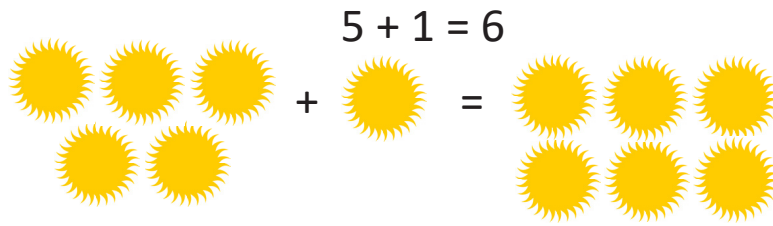
Count on from the first hand.
How many fingers in all?



Picture addition

Sheet 2

Draw a picture to match each addition,



1. $5 + 2 = 7$

2. $3 + 1 = 4$

3. $4 + 2 = 6$

4. $6 + 1 = 7$

5. $8 + 2 = 10$

Count on to find each total.

6. $9 + 2 =$

7. $11 + 3 =$

8. $12 + 2 =$

9. $13 + 4 =$

10. $14 + 3 =$