

Year 1 Autumn Maths Block Assessments: Place Value and Money

1 Circle the **larger** number in each pair:

18 12 14 24


2 marks

2 Circle the **smaller** number in each pair:

17 21 41 40


2 marks

3 How many birds? Write your answer as a number.



1 mark

4 Draw some 1s so the number shapes show 15.



1 mark

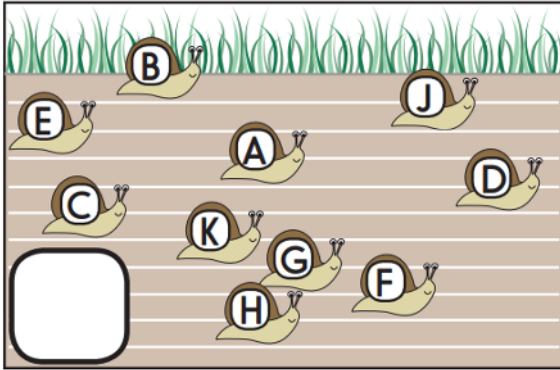
5 Write the **missing** numbers.

56	57	58	59	
66	67	68	69	
76	77	78	79	
86	87	88	89	90

1 mark

6

Write the letter of the snail in 2nd place.



1 mark

7

Circle the 7th bead.



1 mark

8

Draw an arrow to show the number 40.



1 mark

Total / 10 =