




Ten more / ten less Sheet 1

1	2	3	4	5	6	7	8	9	10
11	12		14	15	16	17		19	20
	22	23	24	25	26		28	29	30
31	32	33		35	36	37	38		40
41	42	43	44	45	46	47	48	49	50









Choose a monster.
 Write the number it is on.
 Write the number 10 more.
 Write the number 10 less.
 Do this until you have chosen every monster!

10 less	Monster number	10 more

10 More / 10 Less

Sheet 2

Work out ten more and ten less than the monster's number.

1	2	3	4	5	6	7	8	9	10
11	12		14	15	16	17	18	19	20
21	22	23	24	25	26	27	28	29	30
31	32	33	34	35	36	37	38		40
41	42	43	44	45		47	48	49	
51	52	53	54	55	56	57	58	59	60
61	62	63	64	65	66	67		69	70
	72	73	74	75	76	77	78	79	80
81	82	83	84	85	86	87		89	
91	92	93	94	95	96	97	98	99	100

Ten less	Monster number	Ten more