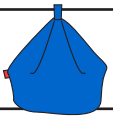


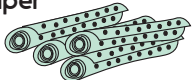






Price differences

Sheet 2

Find the difference in online and in-store price for each item:

| Item | Online Price | In store Price | Difference |
|--|--------------|----------------|------------|
| Beanbag  | £23.75 | £19.89 | |
| Lava lamp  | £37.89 | £36.56 | |
| Curtains  | £75.59 | £79.50 | |
| Wallpaper  | £23.67 | £29.96 | |
| Rug  | £35.64 | £32.78 | |
| Paint  | £21.35 | £23.15 | |
| Bookcase  | £65.45 | £59.69 | |
| Cupboard  | £58.49 | £62.20 | |

Challenge

Choose two items with a total cost of less than £100. Work out how much would be left over from £100.
Repeat for another pair.