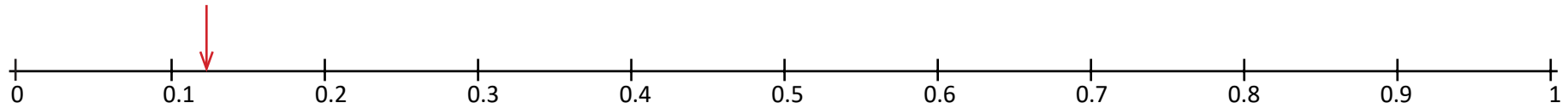


Ordering decimals

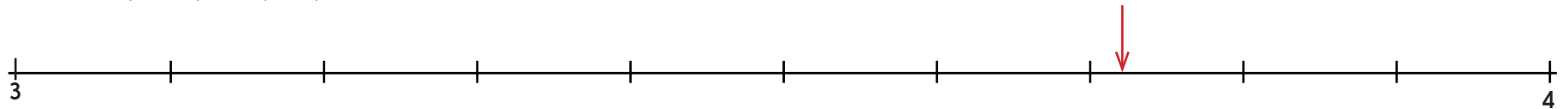
Sheet 1

Discuss with a partner which of the five numbers you think is the smallest and which is the biggest.
Place all five numbers on the line to check.

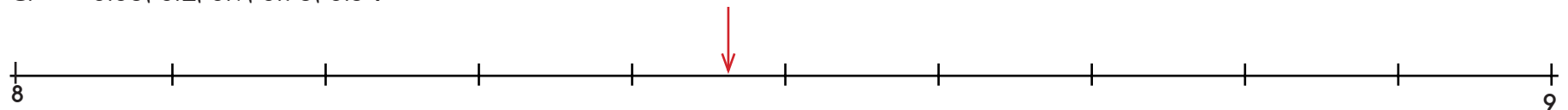
A. 0.25, 0.37, 0.73, 0.04, 0.59



B. 3.4, 3.25, 3.49, 3.8, 3.61



C. 8.05, 8.2, 8.9, 8.75, 8.34



Challenge

Write the position of the arrows on each line.