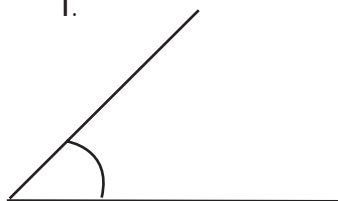


Estimating and measuring angles

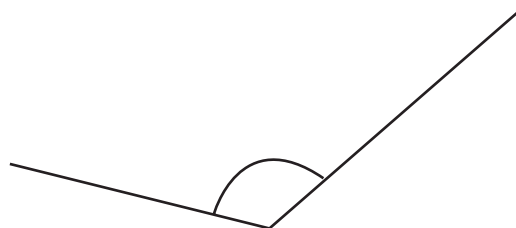
Sheet 2

Estimate then measure these angles:

1.



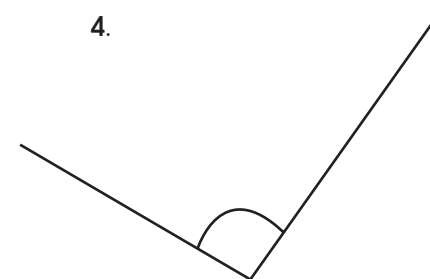
2.



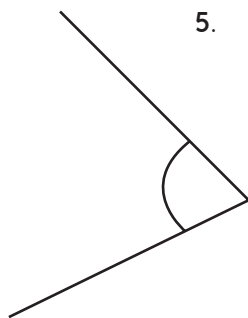
3.



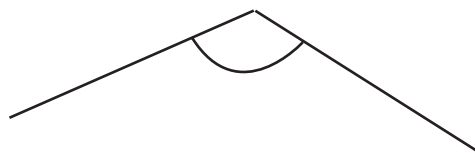
4.



5.



6.



7.



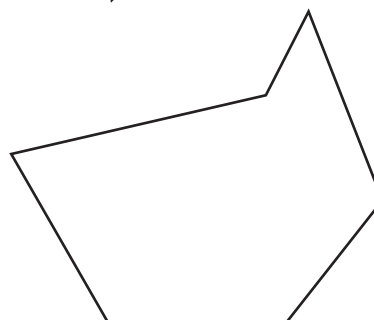
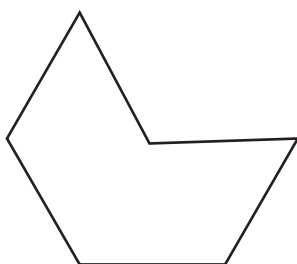
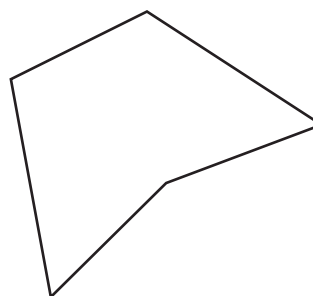
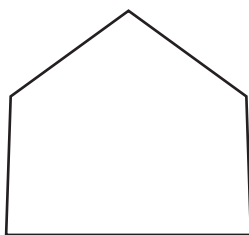
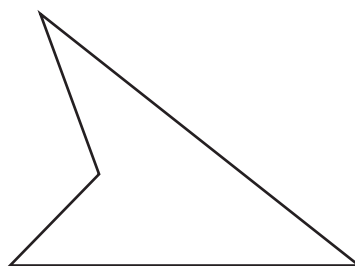
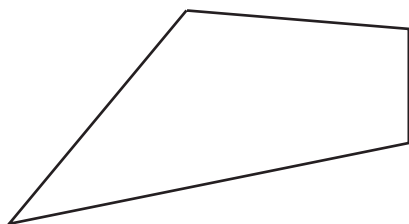
8.



What's the angle?

Sheet 1

1. Are these angles acute, obtuse or reflex?
a) 100° b) 72° c) 272° d) 172° e) 185° f) 135°
2. Look at the internal angles of these shapes. Mark acute angles in red, obtuse angles in blue and reflex angles in green.



Challenge

Draw another two shapes. Each **must** have a mixture of acute, obtuse and reflex angles. Shade the angles red, blue and green as before.