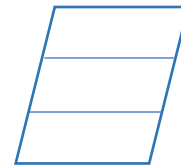
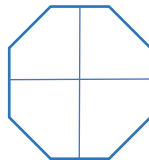
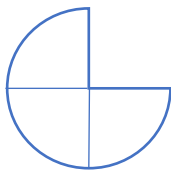
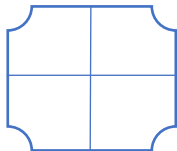



Fractions Unit 2

Problem solving and reasoning questions

Which of these shapes are divided into quarters?

Which are divided into thirds?



Always true, sometimes true or never true?

- A piece of paper folded in half twice is divided into quarters when you open it out
- $\frac{1}{4}$ of a piece of paper is larger than $\frac{1}{3}$ of the same piece of paper
- Two quarters make a half
- $\frac{1}{3}$ of 3 is 1
- $\frac{2}{6} > \frac{1}{3}$

These questions should be provided for children to do once the unit has been completed. They assess the children's mastery of the skills and concepts in this unit.