


Find $\frac{1}{2}$, $\frac{1}{3}$ and $\frac{1}{4}$ of numbers

Sheet 1


Write the number in each half.



$\frac{1}{2}$ of 6 is

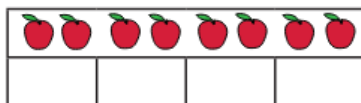


$\frac{1}{2}$ of 8 is




$\frac{1}{2}$ of 10 is


Write the number in each quarter.



$\frac{1}{4}$ of 8 is

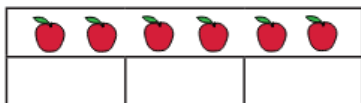


$\frac{1}{4}$ of 12 is

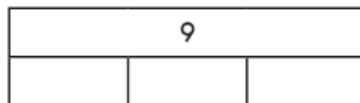


$\frac{1}{4}$ of 16 is


Write the number in each third.



$\frac{1}{3}$ of 6 is



$\frac{1}{3}$ of 9 is



$\frac{1}{3}$ of 12 is

Challenge

Draw bar models to solve these problems:

1. $\frac{1}{3}$ of 24 =

2. $\frac{1}{5}$ of 20 =

3. $\frac{1}{4}$ of 24 =