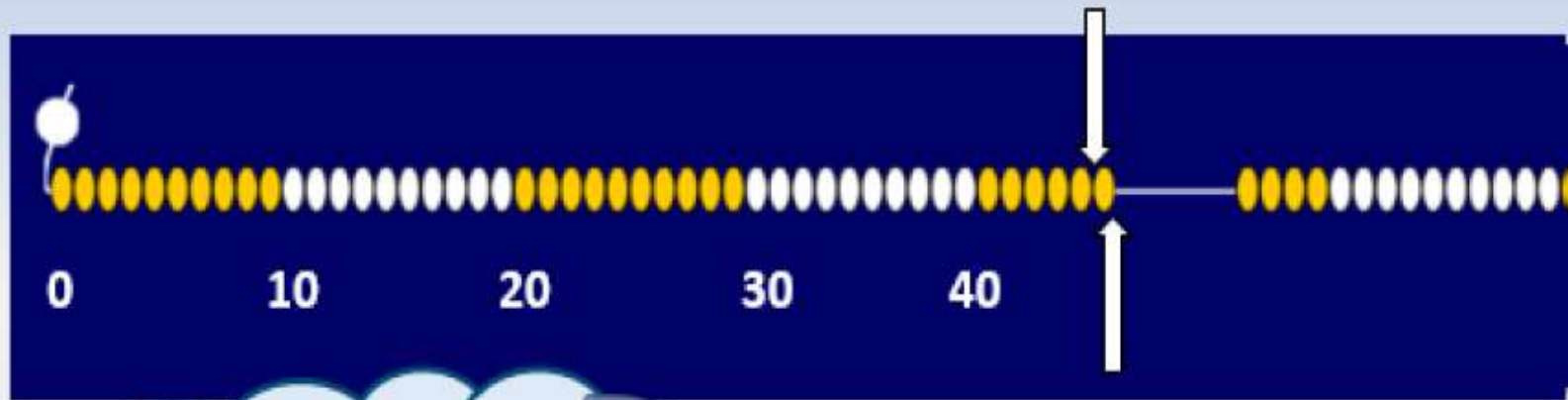


Day 1: Find one more and one less than any 2-digit number.



How many beads
am I showing?



45

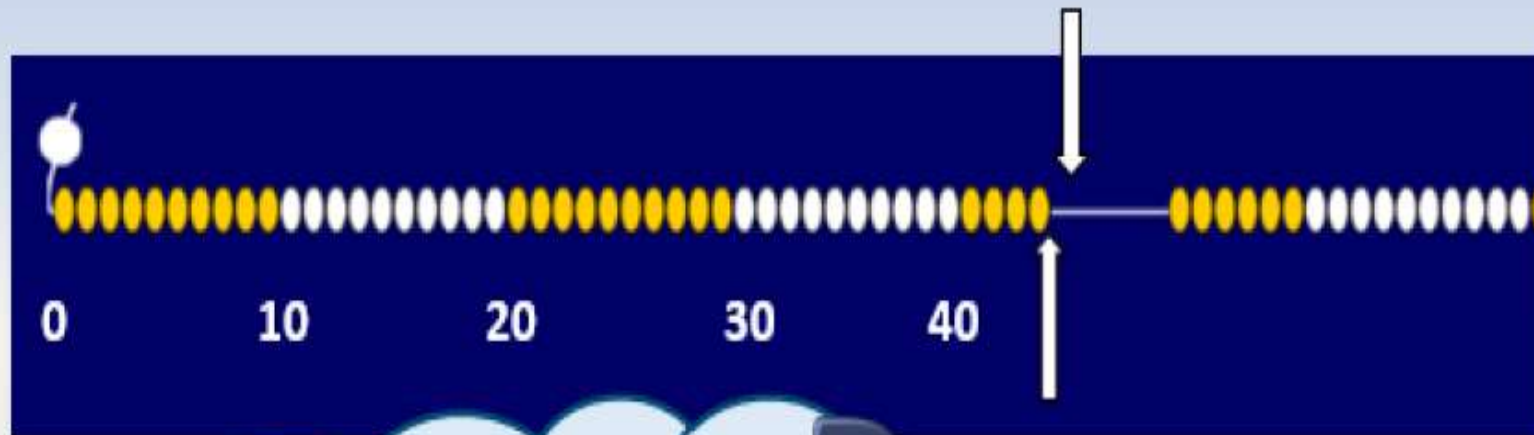
If I slide one more
bead across to join
them, how many will
there be?



46

46 is **one more** than 45.

Day 1: Find one more and one less than any 2-digit number.



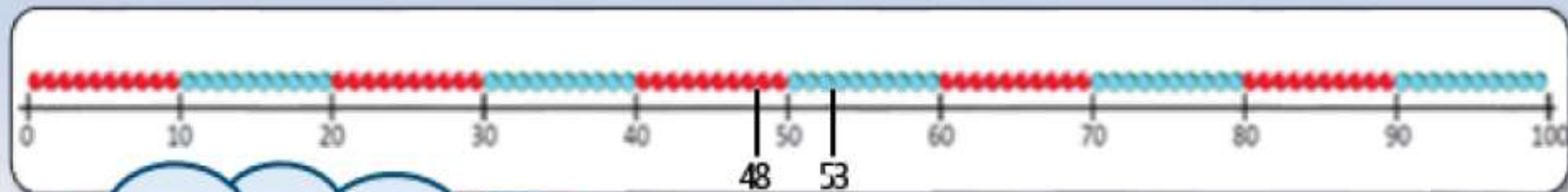
If I put one bead back,
how many will I be
showing then?

44

44 45

44 is one less than 45.

Day 1: Find one more and one less than any 2-digit number.



What comes before
53? What comes
after 53?

What comes before
and after 48?

Mark the numbers on the
line and on the grid.

1-100 grid

1	2	3	4	5	6	7	8	9	10
11	12	13	14	15	16	17	18	19	20
21	22	23	24	25	26	27	28	29	30
31	32	33	34	35	36	37	38	39	40
41	42	43	44	45	46	47	48	49	50
51	52	53	54	55	56	57	58	59	60
61	62	63	64	65	66	67	68	69	70
71	72	73	74	75	76	77	78	79	80
81	82	83	84	85	86	87	88	89	90
91	92	93	94	95	96	97	98	99	100