

Whole class practice Sheet 1

Before you start, which do you think will have the biggest answer? Which will have the smallest answer?

1. 3×243

2. 4×316

3. 5×233

4. 8×221

5. 6×324

6. 7×624

7. 4×354

8. 3×836

9. 7×346

10. 3×876

11. 8×527


12. 6×768

Find the cost Sheet 1


Find the cost of:

- seven boxes of pencils
- four books
- three DVDs
- five CDs
- six paint sets
- three beanies

£4.75



£2.15




£8.65

£8.76



£6.29



£7.99



Challenge

Mrs Merrtens wants to buy the same present for each of her six grandchildren. Her budget is £10 per child. She could buy each child one or two items but they must all receive the same gift. Work out what she could buy, and what the total cost for each option would be.