

On board practice
Sheet 1

1. £24.32 + £14.63

2. £34.25 + £27.43

3. £41.48 + £35.26

4. £24.19 + £17.26

5. £46.25 + £23.94

6. £34.83 + £24.52

7. £64.50 + £23.75

8. £51.90 + £44.69

9. £27.58 + £24.80

10. £24.78 + £14.65

11. £38.60 + £27.45

12. £35.78 + £25.45

13. £12.45 + £23.59 + £15.27

14. £24.67 + £14.25 + £16.45

15. £15.79 + £23.45 + £9.85


Under £50

Sheet 1

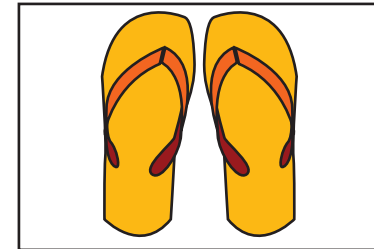
Find pairs of items with a total price of under £50.
How many can you find?




£23.49




£11.89



£12.56



£36.75



£18.25

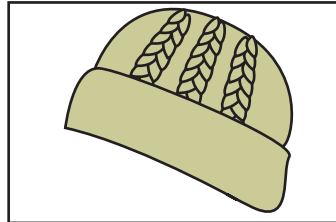
Finding change from £50

Sheet 1

Find the change from £50 for each of these items.



£34.89



£11.89



£27.75



£42.57



£23.79



£35.28



£38.45

£44.35



Challenge

Choose three items. Find the change from £100 for each item.

Finding a difference between two amounts of money by counting up

Sheet 1

Find the difference between the two prices for each item.

Item	Price on website A	Price on website B	Difference in price
Wired headphones	£35.45	£28.79	
Wireless headphones	£75.49	£94.38	
32 GB Memory stick	£24.39	£19.45	
Gaming mouse	£48.75	£52.65	
Gaming keyboard	£72.45	£57.39	
Graphics tablet	£98.67	£69.62	
Console controller	£42.35	£28.72	

Challenge

If you could only shop on one website, which would you use?