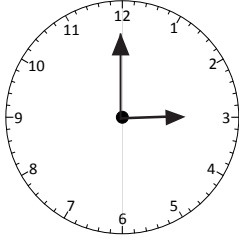
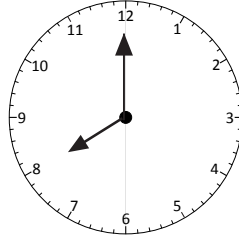


Year 1 Autumn Maths Block Assessments: Time

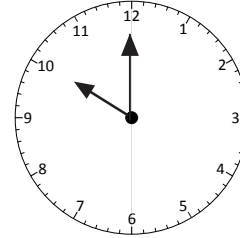
1 Write the times shown by these clocks.



_____ *o' clock*



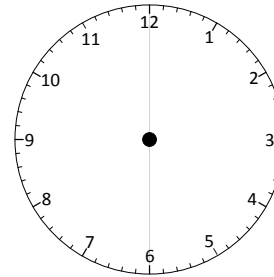
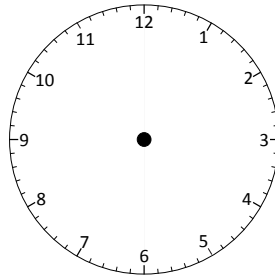
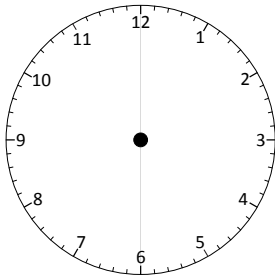
_____ *o' clock*



_____ *o' clock*

3 marks

2 Put hands on clocks to show these times:
6 o'clock, 11 o'clock, 1 o'clock



3 marks

3 Say the days of the week out loud in a soft whisper!

What is the day **after** Sunday?

What is the day **before** Friday?

2 marks

4 Say the months of the year out loud in a soft whisper!

What is the month **after** November?

What is the month **before** April?

2 marks