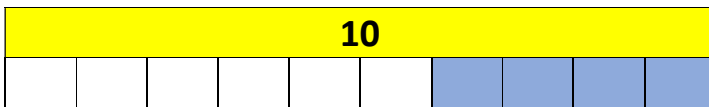




Addition and Subtraction Unit 5

Problem solving and reasoning questions

Write the number of blue bricks and the number of white bricks in these diagrams.



Now write the matching additions.

Write the missing numbers.

$$5 + \square = 10$$

$$\square + 7 = 10$$

$$10 - 4 = \square$$

$$2 + \square = 10$$

$$10 - 1 = \square$$

Which is your favourite addition to 10? Why?

These questions should be provided for children to do once the unit has been completed. They assess the children's mastery of the skills and concepts in this unit.