

Number bonds to 10

Sheet 1

Look at the dots on the first dice and work out how many more would have to be added to make 10. Draw this many dots on the blank dice.



1.




2.




3.




4.



5.



6.



7.



8.



9.



10.



Number bonds to 10

Sheet 2

Look at the number on the dice and work out how many more would have to be added to make 10.

Write this as a number sentence beside the picture.

9

$$9 + 1 = 10$$

1.

8

2.

3

3.

4

4.

7

5.

10

6.

2

7.

0

8.

1

9.

5

10.

6

Challenge

Which one of these three number sentences is wrong? How do you know?

$$7 + 3 = 10 \quad 6 + 5 = 10$$
$$2 + 8 = 10$$

Number bonds to 20

Sheet 3

Look at the number on the dice and work out how many more would have to be added to make 20.

Write this as a number sentence beside the picture.

12 $12 + 8 = 20$

1. 18 _____

2. 13 _____

3. 14 _____

4. 17 _____

5. 10 _____

6. 12 _____

7. 11 _____

8. 15 _____

9. 16 _____

10. 10 _____

11. 4 _____

12. 2 _____

13. 9 _____

14. 7 _____

Challenge

Which one of these four number sentences is wrong? How do you know?

$7 + 13 = 20$ $16 + 5 = 20$
 $14 + 6 = 20$ $8 + 12 = 20$