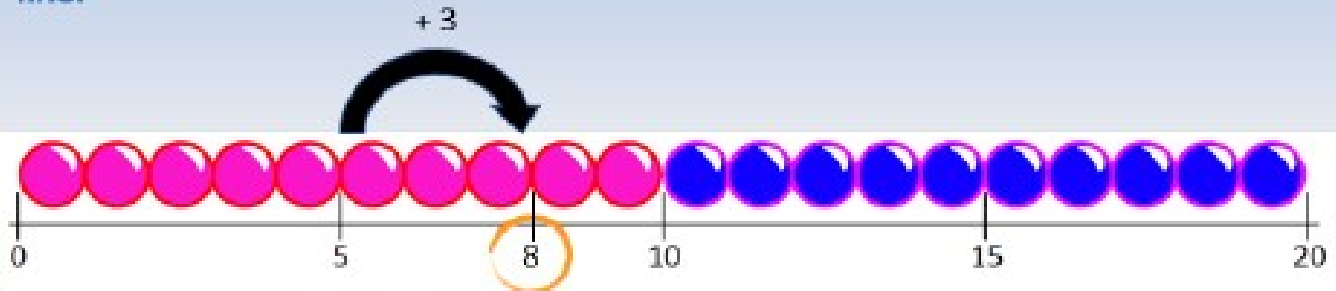
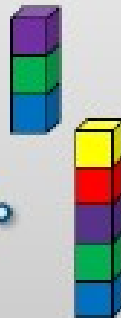


Day 2: Find 2 more/less than any number up to 20, recording the hops on a beaded line.



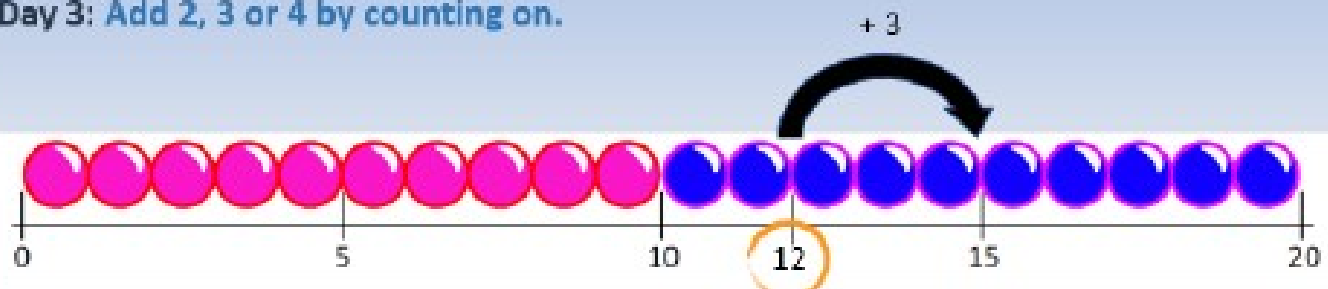
We have 5 cubes.  
Add 3 cubes, how  
many cubes do we  
have now?




What number  
sentence can we  
write?

$$5 + 3 = 8$$

Day 3: Add 2, 3 or 4 by counting on.



Make a tower of 12 cubes  
and add three more. Count as  
you add the cubes.



How many cubes  
now?

13, 14, 15

$$12 + 3 = 15$$