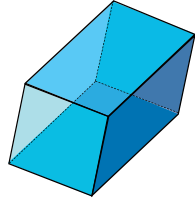


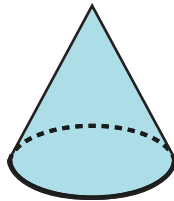
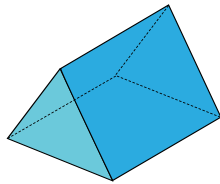
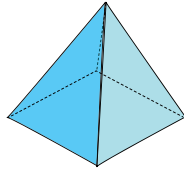
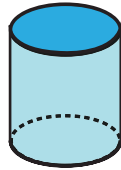
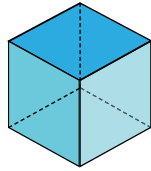
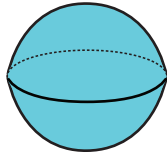
# Who am I? 3D shapes

## Sheet 1

Can you create clues for each shape? The first one has been done for you:



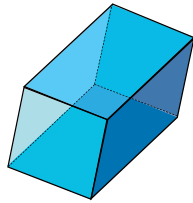
I have 6 faces.  
2 of my faces are square.  
4 of my faces are oblong.  
I have 8 vertices.



# Who am I? 3-D shapes

## Sheet 2

Can you create clues for each shape? The first one has been done for you:



I have 6 faces.  
2 of my faces are square.  
4 of my faces are oblong.  
I have 8 vertices.

